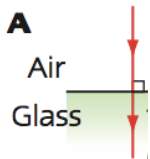


Y9 Refraction

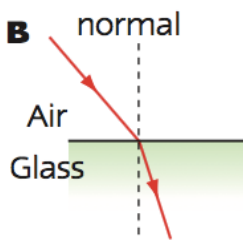
Name: _____ Form: _____ Date: _____

New Science Keywords:

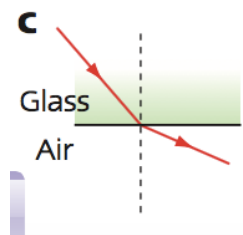
Direction of refraction:



A Light entering the _____ at an angle of _____. The light rays _____ when it enters the more _____ glass. It enters the glass along the _____. Its direction _____.




B Light _____ the glass block at an _____, it _____ in the glass and _____ the _____.



C As the light ray _____ the glass block, it _____ and _____ from the _____.

Refraction Ray Diagram.



Additional notes: